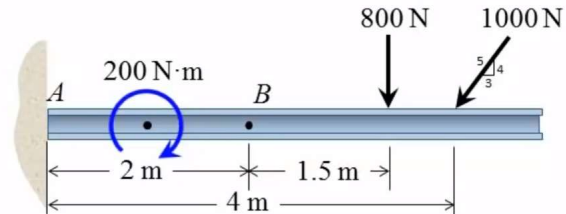


## Internal forces diagrams

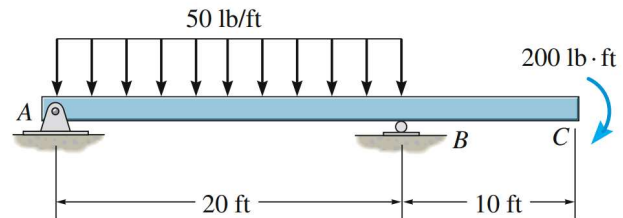
### Problem 1:

Determine the internal forces in point *B*.



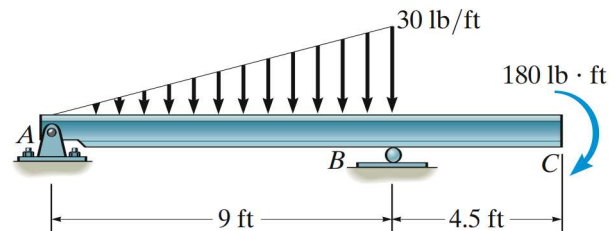
### Problem 2:

Draw the shear and bending-moment diagrams for the beam.



### Problem 3:

Draw the shear and moment diagrams for the beam.



### Problem 4:

Draw the shear and moment diagrams for the beam.

